

2021 WORKSHEET 3

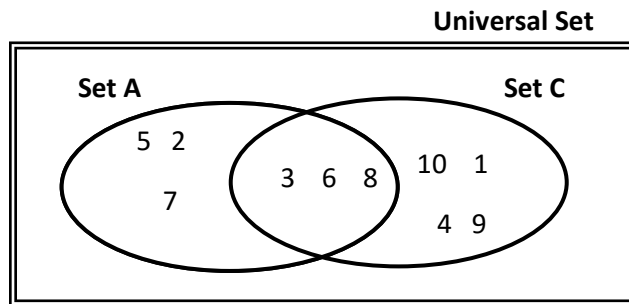
NUMERACY YEAR 7

Answer all the questions with necessary working in your Mathematics Activity book.

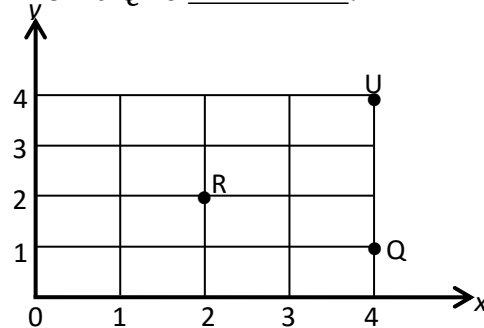
1. Six hundred and two thousand, six hundred and fourteen in figures is written as _____ . **(1 mark)**

2. a. List Set A complement _____

b. $A \cap C$ is _____ **(2 marks)**



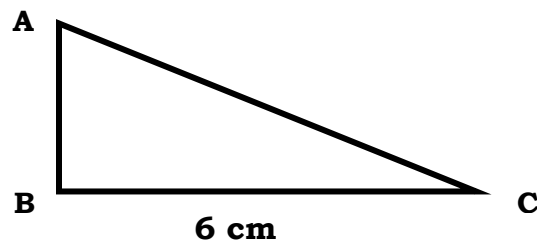
3. The coordinates of Point Q is _____. **(1 mark)**



4. a. $\frac{1}{4} \div \frac{2}{3} = \square$. **(2 marks)**

b. $\frac{1}{2} \times 4\frac{2}{3} = \square$ **(2 marks)**

5. Calculate the area of triangle ABC.



(2 marks)

